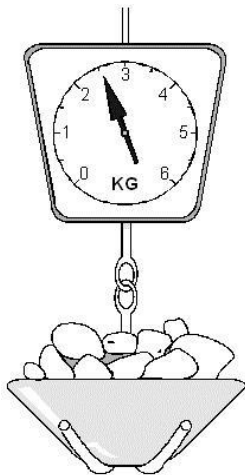
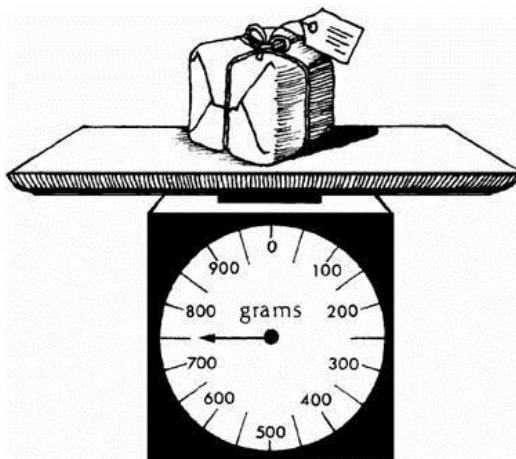


How much do the potatoes weigh?

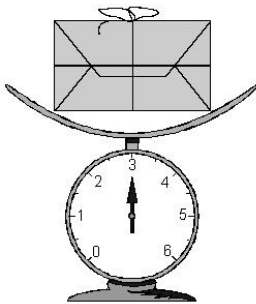


How heavy is the parcel?



How much does this parcel weigh?

Match the correct label to the parcel.



3 centimetres

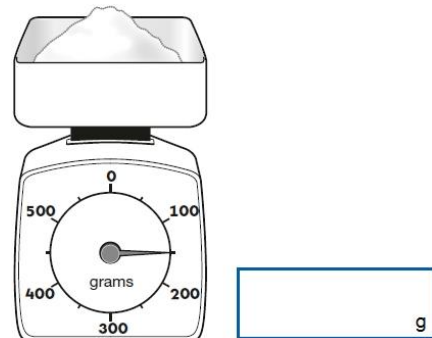
3 kilograms

3 metres


3 litres

3 kilometres

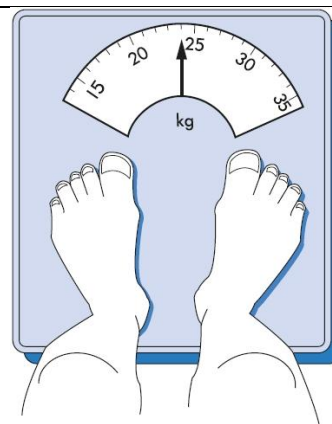
How much does the sugar weigh?



g



The scale shows the weight of the kitten. How much does the kitten weigh?



How heavy is Peter?

How much does the bottle hold?

Match the correct label to the bottle.



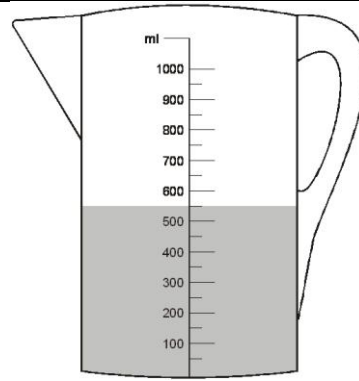
2 centimetres

2 kilograms

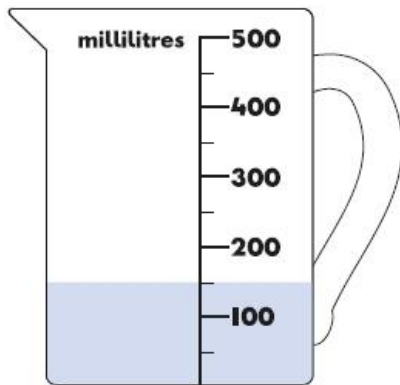
2 litres

2 metres

2 grams

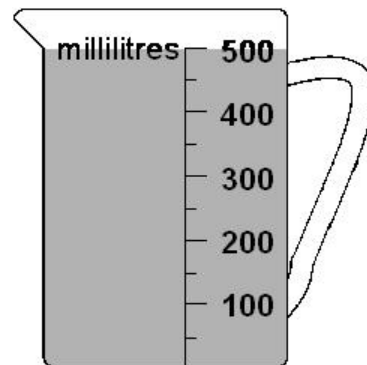


How many millilitres (ml) of water are in the jug?



Kemi needs **450** millilitres of water.

How much **more** water does she need to put in the jug?



Ravi pours **150 millilitres** of water out of this jug.

How much water will be left in the jug?